

KAMPALA QUALITY PRIMARY SCHOOL
P. 4 REMEDIAL REVISION SET 4, 2020
SOCIAL STUDIES

Time allowed: 2 hours and 15 minutes

Name: _____ **Stream:** _____

SECTION A: (40 marks)

1. Name any one basic need in a home.

2. Give the use of a map to a tourist?

3. Mention any food taboo you know.

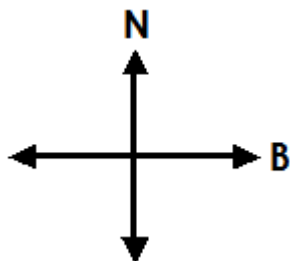
4. Write one value of cows to people.

5. State one way people solve conflicts in the community.

6. Mention one role of the police in keeping peace.

7. Give any one item made from animal skins.

Use the diagram below to answer questions 8 and 9.



8. What element of a map is shown above?

9. Name the point marked B.

10. State any one way man destroys the environment.


11. Give any one cause of road accidents.

12. Give any one problem children can face when going to school.

13. How is Gaba Hill important to people living in Kampala?

14. Mention any one of the children's rights in Uganda.

Use the diagram below to answer questions 15 and 17.



15. Name the condition of weather shown above.

16. How is the above type of weather useful to the environment?

17. Give one example of a mineral.

18. Write down any one way children rights are abused.

19. Give any one way people use electricity in their homes.

20. Name the commonest type of fish caught in Uganda.

21. Give one reason why some children in your class perform well.

22. Mention any one method of preserving fish.

23. Name the Prime minister of Uganda.

24. Give one importance of a bank to people in a community.

25. Mention one reason why some people in the community fail to meet their needs.

26. What title is given to the traditional leader of the Buganda?

27. Give one product from tobacco.

28. State one reason why some areas get poor social services.

29. What title is given to the political head of Kampala Capital City Authority?

30. Mention one danger caused by too much garbage in public places.

31. Why is it important to make a budget before spending money?

32. Give one problem faced by road users in Kampala.

33. Write K.C.C.A in full.

34. State any one way people use baskets in a home.

35. Mention the tree from which bark cloth is made.

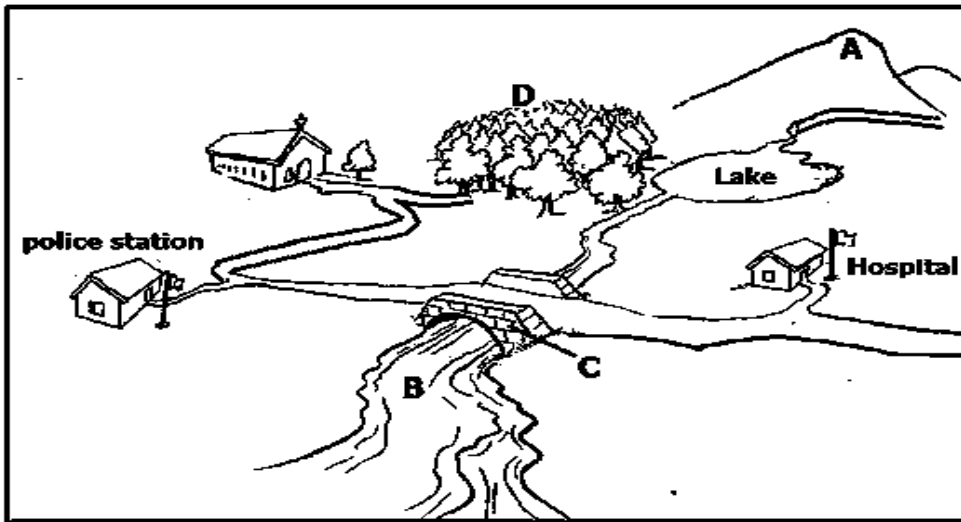
36. Write down one way of improving safety when using water transport.

37. Give one duty of the Central Bank.

38. Mention one way the L.C.I executive Committee provides security.
-
39. State any one problem faced by a big family.
-
40. Name any one tool that helps a teacher to manage time during teaching.
-

SECTION B (60 marks)

41. Study the map below and answer the questions that follow.



- (a) How is vegetation marked **D** important to the people in the community?
-
- (b) Name feature marked **A** on the map.
-
- (c) Draw the symbol for the marked **C** on the map in the space provided below.



- (d) Mention one economic activity that can be carried out in physical feature marked **B**.
-
- 42(a) State any one way man can make good use of the components of the environment:
- (i) trees:
-

(ii) birds:

(b) Mention one activity of man that can lead to the death of wild animals in the environment.

(c) State one way man can conserve the environment.




43(a) Mention one means of transport children use to and from school.

(b) Give any one problem children face at school.

(c) Apart from parents, mention one group of people who can help a school child on his / her way to school.

(d) Write down one bad thing children do on their way to school.

44(a) Name the map symbols below.

(b) Give one reason why symbols are used on a map.

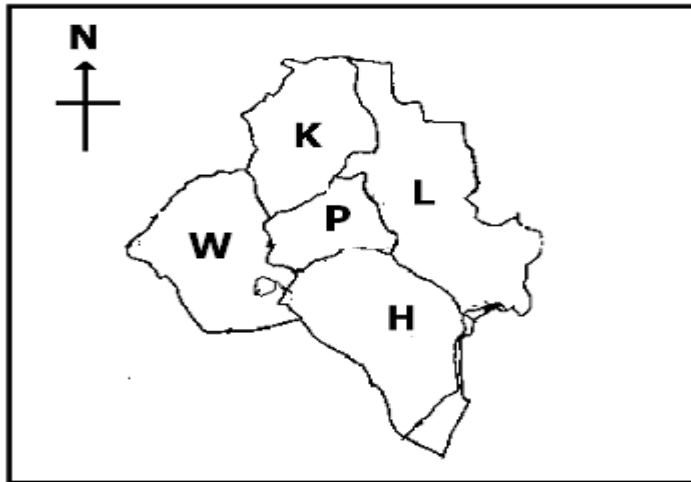
45(a) Mention one local material people use to make mats.

(b) Give one way clay is useful to people in a community.

(c) What do we call a person who makes pots?

(d) Name one product made from animal skins.

46. **Study the map of Kampala given below and answer the questions that follow.**



(a) Name the Urban Council marked **W**.

(b) Write the letter that marks the Urban Council where the biggest referral hospital in Uganda is found.

(c) Mention one important place found in Urban Council marked with letter **P**.

(d) Write the title given to the head of an Urban council.

47(a) What are food crops?

(b) Mention any two common food crops.

(i)

(ii)

(c) Mention any one problem farmers face when growing crops.

48(a) Mention one social activity in our community.

(b) Give any one way people can show their culture to others.

(c) Write down one duty of a cultural leader.

(d) Mention one importance of cultural sites.

49(a) Mention the two types of education.

(i)

(ii)

(b) Write down any two importance of formal education.

(i)

(ii)

50(a) What is transport?

(b) Give one importance of road signs on roads?

(c) Mention any one means of road transport.

(d) What is the fastest type of transport?

51(a) Write any two ethnic groups found in Uganda?

(i)

(ii)

(b) Give any two local languages spoken in Uganda.

(i)

(ii)

52(a) What is communication?

(b) Write down two modern means of communication.

(i) _____

(ii) _____

(c) Mention any one radio station broadcasting in Uganda.

53(a) What is a wetland?

(b) Mention any two ways wetlands are important in our environment.

(i) _____

(ii) _____

(c) Give one danger of destroying wetlands.

54(a) **Match items in table A to those in table B.**

A:

B

Gipiir

the bad brother of Nambi.

Isaza

the first Mugisu on earth.

Walumbe

the king of hell in the legend of Batooro.

Mundu

the legend of the spear and the Bead.

(i) Gipiir _____

(ii) Isaza _____

(iii) Walumbe _____

(iv) Mundu _____

55(a) Give one reason why people build houses.

(b) Mention two materials used to build a hut.

(i) _____

(ii) _____

(c) State one problem faced by people living in slums.
